

Authors: Anne Frank

By Biography.com Editors and A+E Networks, adapted by Newsela staff on 07.27.16
Word Count **429**



Anne Frank in 1940, while at 6. Montessorischool, Niersstraat 41-43, Amsterdam, Netherlands. Photo: Dutch copyright law Art. 38: 1 (unknown photographer & pre-1943)

Synopsis: Anne Frank was a Jewish girl born in 1929 in Germany. She grew up during World War II. Her family had to hide for two years to escape the Nazis. Anne wrote about her life while hiding. Her diary continues to be read by many people today.

Early Life

Anne Frank was a daughter of Edith and Otto Frank. She had a sister named Margot who was three years older. They lived in Frankfurt, which is a city in Germany.

The Nazis became a very powerful group in Germany. They did not like Jews or people of other races. Adolf Hitler became their leader.

The Frank family left Germany because they were Jewish. The Nazis blamed the Jews for many problems. This made the family want to move.

The Franks moved to Amsterdam, Netherlands, in 1933.

Anne began attending school there. She was a good student. Anne and Margot were happy and had many friends.

Nazi Occupation

Peace did not last long. The Nazis soon came to Amsterdam. They made Jews wear special clothing. They would not let Jews own stores.

Jewish people were being forced to leave their homes. The Frank family went into hiding from the Nazis. The family hid for two years in a secret building. Frank's parents gave her a diary for her 13th birthday. She started to write in it every day. She wrote about her life in the secret place and her dreams.

Captured By The Nazis

Suddenly the Nazis found the hiding spot. The family was taken to a work camp called Auschwitz. At Auschwitz, the men and women were separated. This was the last time that Otto Frank ever saw his wife or daughters.

After months of hard work, Anne and Margot were sent to another camp. Their mother was not allowed to go with them. The camp was dirty and there was no food. The girls both got sick and died. Otto Frank was the only person in the family to live.

"The Diary Of A Young Girl"

When Otto Frank returned to Amsterdam, he found Anne's diary. It had been saved. He found the strength to read it. He was surprised by what he discovered. His daughter was a gifted writer.

Otto Frank wanted to have parts of Anne's diary made into a book. "The Diary of a Young Girl" was published on June 25, 1947.

Anne Frank's diary is important because of the events she described and for her great storytelling. Her words of faith and hope have been read by millions of people around the world.

Quiz

- 1 What is the main reason why the Frank family left Germany?
 - (A) because they wanted Anne and Margot to go to school in Amsterdam
 - (B) because Germany started to become a dangerous place for Jews
 - (C) because Otto and Edith Frank did not enjoy living in Frankfurt
 - (D) because Hitler and the Nazis kicked all of the Jews out of Germany

- 2 Which event happened FIRST in the biography?
 - (A) The Nazis found the Franks' hiding spot.
 - (B) Anne and Margot were sent to camps.
 - (C) Anne got a diary for her birthday.
 - (D) Anne's father found her diary.

- 3 What is Anne's father's point of view about Anne's diary entries?
 - (A) He enjoyed reading Anne's story and thought she was a good storyteller.
 - (B) He was concerned about the stories Anne shared in her diary and didn't want anyone to read them.
 - (C) He was angry she had kept her diary secret and wished she had shared her writing with him.
 - (D) He was sad Anne had written her thoughts in a diary instead of talking about her concerns with her family.

- 4 Which of the following BEST describes the author's point of view?
 - (A) Anne Frank's family didn't hide long enough in their hiding spot in Amsterdam to avoid the Nazis.
 - (B) Anne Frank's family didn't want the stories in her diary to be shared with the world for everyone to read.
 - (C) Anne Frank's diary is important because it describes what life was like for Jews during the Holocaust.
 - (D) Anne Frank's diary is a sad and hopeless book to read because it describes the horrible events of the Holocaust.

Writing Prompt:

Write 2 or more paragraphs comparing/contrasting Anne Frank's life to your life.

Student Name: _____ Score: _____

Subtraction Word Problems

Work Space

Jenny has 7 dollars. She gives 4 dollars to Dora. How much money does she have left?

Answer = _____

Kelly fed 8 sparrows. After a minute, 2 sparrows flew away. How many sparrows are left for her to feed?

Answer = _____

Kitty eats 5 biscuits out of 8 biscuits. How many biscuits are left to eat?

Answer = _____

Jack hit some balloons leaving 2 balloons. If there were 6 balloons, how many balloons did he hit?

Answer = _____

In a basketball practice, each player was given 9 chances to throw the ball into the basket. Justin hit the target 4 times. Find the number of chances he missed.

Answer = _____

Student Name: _____ Score: _____

Addition Word Problems

WorkSpace

A fruit vendor bought 45 apples and 60 oranges. How many fruits did he buy?

Answer = _____

How much does 83 plus 97 equal?

Answer = _____

Julie has 24 cream biscuits and 38 chocolate biscuits. How many biscuits does she have?

Answer = _____

Jack and Jill played a balloon shooting game. Jack hit 26 balloons and Jill hit 48 balloons. How many balloons did they hit in total?


Answer = _____

Shirley got 75 dollars from her mom and 95 dollars from her father. How much money does she have now?

Answer = _____


Area Assessment #1

1. In the square below, the length of each side is 1 unit. What is the area of the square?




1 unit

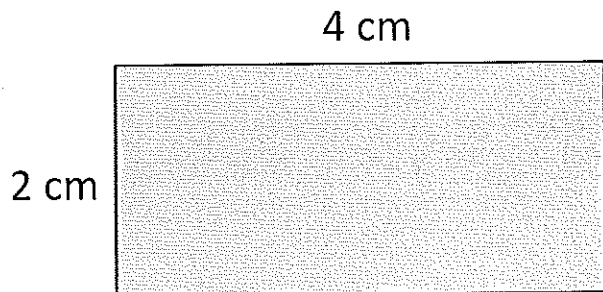
2. What is the total area of the shaded region?



3. What is the total area of figure A and B?



4. What is the total area?



Name:

Date:

Number:

Place Value Power!

125

What is the value of the...

hundreds place _____

tens place _____

ones place _____

How many...

hundreds _____

tens _____

ones _____

What is 10 more
than the number?

What is 10 less
than the number?

Compare

_____ ○ _____

What is 100 more
than the number?

What is 100 less
than the number?

How many ones do you
need to add to the
number to make a ten?

Draw a model of the number.


Is the number
Even or Odd?

Draw

Name: _____ Date: _____

Place Value Review

DIRECTIONS: Read the following questions and fill in the blank with the correct answer.



What is the value of the underlined digit it?

1. 65,342 _____

2. 44,908 _____

3. 16,332 _____

4. 821 _____

5. 8,325 _____

6. 690 _____

7. 214,267 _____

8. 10,089 _____

9. 336,644 _____

10. 545,721 _____

What is the place value of the underlined digit?

11. 4,369 _____

12. 123 _____

13. 20,006 _____

14. 90 _____

15. 33,788 _____

16. 555 _____

17. 45 _____

18. 982 _____

19. 798,811 _____

20. 2,266 _____

21. 11,784 _____

22. 6,093 _____

Write each number in expanded form.


23. 1,544 _____

24. 12,399 _____

25. 77 _____

26. 456 _____


27. 151,963 _____



Name: _____

$$\begin{array}{r} 13.7 \\ + 54.0 \\ \hline \end{array}$$

$$\begin{array}{r} 23.2 \\ + 66.6 \\ \hline \end{array}$$



$$\begin{array}{r} 20.1 \\ + 71.3 \\ \hline \end{array}$$

$$\begin{array}{r} 41.1 \\ + 18.6 \\ \hline \end{array}$$

$$\begin{array}{r} 45.0 \\ + 11.7 \\ \hline \end{array}$$

$$\begin{array}{r} 10.1 \\ + 83.6 \\ \hline \end{array}$$


$$\begin{array}{r} 28.8 \\ + 41.1 \\ \hline \end{array}$$

$$\begin{array}{r} 62.6 \\ + 21.1 \\ \hline \end{array}$$

$$\begin{array}{r} 42.1 \\ + 14.1 \\ \hline \end{array}$$

$$\begin{array}{r} 67.5 \\ + 22.3 \\ \hline \end{array}$$

Name: _____



$$\begin{array}{r} 8 \\ x \\ \hline 64 \end{array}$$

$$\begin{array}{r} 5 \\ x \\ \hline 45 \end{array}$$

$$\begin{array}{r} 7 \\ x \\ \hline 42 \end{array}$$

$$\begin{array}{r} 8 \\ x \\ \hline 80 \end{array}$$

$$\begin{array}{r} 7 \\ x \\ \hline 49 \end{array}$$

$$\begin{array}{r} 4 \\ x \\ \hline 8 \end{array}$$

$$\begin{array}{r} 7 \\ x \\ \hline 7 \end{array}$$

$$\begin{array}{r} 4 \\ x \\ \hline 28 \end{array}$$

$$\begin{array}{r} 3 \\ x \\ \hline 18 \end{array}$$

$$\begin{array}{r} 4 \\ x \\ \hline 16 \end{array}$$